

THE GYAN BHAIRAV GLOBAL SCHOOL

HARPUR, GUTHANI, SIWAN, BIHAR 841435

(Run by Gyan Bhairav Foundation registered under society act 1860, Govt. of Bihar)

www.gbgs.ac.in, gbglobalschool@gmail.com

School Registration Code-RTE/SWN/2018-19/000231

UDISE – 10160807502

CLASS III

Dear Students,

Summer Vacation is a welcome break but..... Good Habits and Good Manners are lifelong assets and manners must be practiced until they become a habit. Four magic words that are basics of good manners are – Please, Thank you, Excuse me and Sorry. Make these four words a habit and see the difference. Try to practice these manners -

Manners: At home:

- Help to keep the house clean especially the areas you use. Clear the toys, books or crafts that remain after you have finished.
- Honesty is the best policy. Tell the truth at all times.
- Be polite.
- Share the T.V time. Do not sit too close while watching T.V.
- Be fair with your friends, brothers and sisters.
- Be responsible.

At the dining table:

- Take small helpings and refill, clean your plate up.
- Take small bites, eat neatly, slowly with your mouth closed.
- Help to clear the table and clean up.

In the park:

- Littering makes the park untidy.
- Destroying the plants or plucking the flowers will spoil the beauty.
- Wait for your turn on swing and slides.

At a party:

- Wish the host.
- Don't mess up somebody's house.

While shopping:

- Softly ask your parent for what you want. If refused, don't throw a tantrum.
- Be careful, don't touch any breakable item.

On the telephone:

- If there are no elders around, don't let the phone ring long, answer it.
- Talk softly when someone is speaking on the phone and don't interrupt.

Hygiene:

- Brush your teeth twice a day.
- Do trim your nails often.
- Do not waste water and electricity.
- Keep your surroundings and environment clean. It is bad habit to throw things out of the window, car or a balcony.
- Make friends having good habits that respect their elders and use good language.

Be Eco-Friendly:

- Plant trees and conserve your natural resources
- Stop using of plastics

THE GYAN BHAIKAV GLOBAL SCHOOL

HARPUR, GUTHANI, SIWAN, BIHAR 841435

(Run by Gyan Bhairav Foundation registered under society act 1860, Govt. of Bihar)

www.gbgs.ac.in, gbglobalschool@gmail.com

School Registration Code-RTE/SWN/2018-19/000231

UDISE – 10160807502

CLASS III

English

Section A: Reading Comprehension

1. Read the following passage and answer the following

An alligator is a very big reptile. Alligators can grow to be more than 15 feet long. An alligator has a long tail, short legs, strong jaws, and sharp teeth. It eats fish, mammals, and birds. Alligators live in rivers and swamps where the weather is very warm. There are lots of alligators in Florida.

a. What kind of animal is an alligator?

A. an amphibian B. a mammal C. a reptile D. a fish

b. What does an alligator look like?

I. It has long legs. II. It has a long tail. III. It has sharp teeth.

A. I only B. I and II C. II and III D. I, II, and III

c. What do alligators eat?

I. birds II. plants III. fish

A. I only B. I and II C. I and III D. I, II, and III

d. According to the story, most alligators are

A. big and long B. tall and skinny C. small and weak D. fat and funny

e. The opposite of sharp is

A. dull B. big C. soft D. smart

f. What can the reader discover about Florida from the passage?

A. It is far away. B. It is a very big place. C. It has rivers and swamps.

D. It is the best place to see alligators.

2. Read the following passage and answer the following

A bird is a kind of animal. A bird has two wings. Birds are the only animal with feathers. Pigeons, eagles, swans, and blue jays are all different kinds of birds. Most birds can fly. Turkeys and penguins are two kinds of birds that cannot fly.

a. What is this passage about?

A. what birds are like B. why some birds can't fly C. where birds have feathers

b. What birds can fly? A. all birds B. most birds C. some birds

c. According to the passage, which of these birds cannot fly?

A. eagles B. swans C. turkeys

d. All birds are _____ A. animals B. blue jays C. penguins

Section B: Writing

1. Fill in the blanks with the words from the bracket.

(Horses village cat dogs milk kittens hay pond grandmother cowcock hen) In June we went to a _____



where my _____



lives. She has a farm. On her farm there are many animals. There are two



a _____



With its _____



, three _____



, one _____



as well as a _____



and a _____



Every morning she feeds her animals with _____



, or



_____. They drink water from a _____



on the farm.

2. Look at the pictures and fill in the blanks.

THE GYAN BHAIKAV GLOBAL SCHOOL

HARPUR, GUTHANI, SIWAN, BIHAR 841435


(Run by Gyan Bhairav Foundation registered under society act 1860, Govt. of Bihar)

www.gbgs.ac.in, gbglobalschool@gmail.com

School Registration Code-RTE/SWN/2018-19/000231

UDISE – 10160807502

CLASS III



Section C: Grammar

1. Write the opposite word.

(a) Go _____ (b) Fat _____ (c) Big _____ (d) Good _____ (e) Start _____ (f) Sharp _____

2. Write the feminine of the following:

a) Boy _____ b) Father _____
c) Hero _____ d) Tiger _____ e) Uncle _____ f) Horse _____

3. Make sentence by using following words:

a) This: _____ b) That: _____

4. Write the plurals:

1. boat _____ 2) bush - _____

5. Fill in the blanks with the correct words:

1. What are you _____ of? (maid / afraid)
2. We _____ at night. (sleep / sweep)
3. Rahul is _____ in the exams. (fail / tail)

1. Write the opposite of the following words

a. Friend
b. Son
c. Wife
d. Morning e. down

THE GYAN BHAIKAV GLOBAL SCHOOL

HARPUR, GUTHANI, SIWAN, BIHAR 841435

(Run by Gyan Bhairav Foundation registered under society act 1860, Govt. of Bihar)

www.gbgs.ac.in, gbglobalschool@gmail.com

School Registration Code-RTE/SWN/2018-19/000231

UDISE – 10160807502

CLASS III

COMPUTER

Q.2 Name the different types of computer.

Ans. _____

Q.3 Write the steps to start MS-Paint.

Ans. _____

Q.4 What is a Cursor?

Ans. _____

VI. Find the missing letters.

- | | |
|--------------------|------------------------|
| 1. K ___ YB ___ RD | 2. M ___ IT ___ R |
| 3. D ___ SKT ___ P | 4. P ___ L ___ T ___ P |
| 5. T ___ B ___ ET | 6. P ___ I ___ T ___ |

VII. Write the full form of the following.

1. ALU : _____
2. CD : _____
3. CPU : _____
4. DVD : _____
5. WWW : _____

THE GYAN BHAIRAV GLOBAL SCHOOL

HARPUR, GUTHANI, SIWAN, BIHAR 841435

(Run by Gyan Bhairav Foundation registered under society act 1860, Govt. of Bihar)

www.gbgs.ac.in, gbglobalschool@gmail.com

School Registration Code-RTE/SWN/2018-19/000231

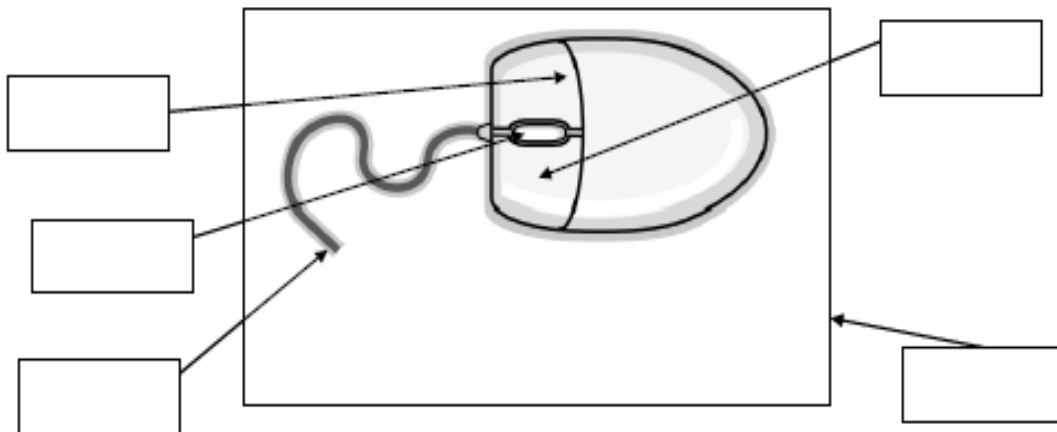
UDISE – 10160807502

CLASS III

VIII. Answer in one word.

1. Name the keys that help us to write sentences. _____
2. Name the key that helps to move the cursor down. _____
3. On which part of the Notepad window are the minimize, maximize and close buttons are present. _____
4. Name the device that gives power to computer. _____
5. Name the device that helps to capture live images. _____

IX. Label the diagram.



Helpbox - left button , right button , scroll wheel , mouse pad , wire

X. Draw and colour.

(a) Any one tool of MS-Paint



(b) Any one key of keyboard



THE GYAN BHAIKAV GLOBAL SCHOOL

HARPUR, GUTHANI, SIWAN, BIHAR 841435

(Run by Gyan Bhairav Foundation registered under society act 1860, Govt. of Bihar)

www.gbgs.ac.in, gbglobalschool@gmail.com

School Registration Code-RTE/SWN/2018-19/000231

UDISE – 10160807502

CLASS III

MATH

1. Fill in the blanks:

- Number $550 = 500 + \underline{\hspace{2cm}} + 0$
 - The biggest three digit number is $\underline{\hspace{2cm}}$.
 - The three-digit number having units place 5, tens place 3 and hundreds place 7, is written as $\underline{\hspace{2cm}}$.
 - $200 + 0 + 5 = \underline{\hspace{2cm}}$
 - In the number 347, the digit 4 is at the $\underline{\hspace{2cm}}$ place. Hence the place value of the digit 4 is $\underline{\hspace{2cm}}$.
- The smallest one digit number is smaller than the biggest two-digit number by $\underline{\hspace{2cm}}$.

2. Match the following:

- | | |
|----------------------------------|--------------|
| 1) Five hundred and seventy nine | a) 3 sides |
| 2) Triangle | b) a quarter |
| 3) $\frac{1}{4}$ | c) 600 |
| 4) $900 + 0 + 9$ | d) 579 |
| 5) $333 + 555$ | e) 333 |
| 6) Surface of back board | f) 909 |
| 7) $999 - 666$ | g) 888 |
| 8) 6 H | h) flat |

3. Arrange vertically and add:

- a) $689 + 221$ b) $289 + 65 + 7$
c) $540 + 139 + 235$ d) $257 + 16 + 135$

4. Arrange vertically and subtract:

- a) $968 - 634$ b) $356 - 138$
c) $703 - 307$ d) $200 - 111$

5. Do as directed:

- Write the expanded form of the following numbers: i) 470 ii) 663
- Make four three –digit odd numbers using the given digits only once – 3, 9, 4
- Using the given digits only once, make the smallest and the biggest three digit numbers-0, 3, 2
- Put the correct symbols ' $<$ ' or ' $>$ ' in the blanks:
i) $378 \underline{\hspace{1cm}} 379$ ii) $541 \underline{\hspace{1cm}} 514$ iii) $789 \underline{\hspace{1cm}} 780$ iv) $407 \underline{\hspace{1cm}} 470$
- Write the following numbers in the words: i) 789 ii) 396 iii) 963 iv) 805
- Arrange the following numbers into ascending order:
i) 547, 475, 457, 745 ii) 968, 689, 698, 869
- Arrange the following numbers into descending order: i) 346, 463, 364, 643 ii) 756, 754, 757, 751
- The three digit odd number formed by using the digits 3, 1, 6 is $\underline{\hspace{2cm}}$.
- The smallest three-digit number is $\underline{\hspace{2cm}}$
- $600 + 70 + 4 = \underline{\hspace{2cm}}$

Solve the following word problems:

- a) A fruit seller has 243 sweetlimes, 150 apples and 15 jackfruits. How many fruits does he have in all?

THE GYAN BHAIRAV GLOBAL SCHOOL

HARPUR, GUTHANI, SIWAN, BIHAR 841435

(Run by Gyan Bhairav Foundation registered under society act 1860, Govt. of Bihar)

www.gbgs.ac.in, gbglobalschool@gmail.com

School Registration Code-RTE/SWN/2018-19/000231

UDISE – 10160807502

CLASS III

- b) In a class of 100 students, 56 are boys. How many girls are there in the class?
- c) If 22 children are playing football, 18 children are playing kho-kho and 200 are watching the game on the field. How many children are there on the field altogether?
- d) If one ice-cream cone costs Rs. 20, what is the cost of 5 such ice-cream cones?

THE GYAN BHAIRAV GLOBAL SCHOOL

HARPUR, GUTHANI, SIWAN, BIHAR 841435

(Run by Gyan Bhairav Foundation registered under society act 1860, Govt. of Bihar)

www.gbgs.ac.in, gbglobalschool@gmail.com

School Registration Code-RTE/SWN/2018-19/000231

UDISE – 10160807502

CLASS III

HINDI

HINDI

भाग – क
अपठित गद्यांश

मधुपुर गाँव के पास षंभू का एक बहुत बड़ा बगीचा था। उसमें उसने आम, अमरुद और जामुन के पौधे लगाए। षंभू बहुत मेहनत से पौधों की देखभाल करता था। पास के गाँव के बच्चे प्रतिदिन बगीचे में खेलने आते थे। षंभू बच्चों को बहुत प्यार करता था। बच्चे भी काम में उसका हाथ बँटाने लगे। देखते ही देखते पेड़ों पर फूल और फल आने लगे। षंभू बच्चों को खूब फल खाने के लिए देता। बच्चे प्यार से उसे षंभू काका कहकर बुलाने लगे।

प्र.1 गद्यांश पढ़कर सही उत्तर लिखो—

1. षंभू का बगीचा कहाँ था?
2. गाँव का क्या नाम था?
3. षंभू पौधों की देखभाल कैसे करता था?
4. बगीचे में कौन खेलने आते थे?

1. षंभू बच्चों को क्या देता?
6. बच्चे प्यार से षंभू को क्या कहकर बुलाने लगे?

प्र.2. निम्न ष्शब्दों के विलोम गद्यांश से ढूँढकर लिखिए—

1.छोटा-----2.कमी-कमी -----

प्र.3 पर्यायवाची षब्द गद्यांश से ढूँढकर लिखो—

1.उपवन-----2.पुरष -----

अपठित गद्यांश

एक पेड़ पर चुन्नी, मुन्नी नाम की दो चिड़ियाँ रहती थीं। उनमें बहुत गहरी दोस्ती थी। उनके घोंसले एक ही डाल पर पास-पास थे। चुन्नी के घोंसले में उसके दो बच्चे भी थे। जब वह बच्चों के लिए दाना लेने जाती थी तो मुन्नी बच्चों की देखभाल करती। उन्हें दाना खिलाती, लोरी सुनाती और अन्य पक्षियों से उनकी रक्षा करती।

प्र.1 निम्न प्रश्नों के उत्तर दीजिए—

1. पेड़ पर कौन रहता था?
2. चुन्नी के घोंसले में कितने बच्चे थे?

प्र.2 खाली जगह भरो—

1. मुन्नी अन्य पक्षियों से उनकी ----- करती।
2. चुन्नी और मुन्नी में बहुत गहरी ----- थी।

प्र.3 निम्न ष्शब्दों के बहुवचन गद्यांश से ढूँढकर लिखो—

1. घोंसला -----
2. बच्चा-----

भाग – ख

प्र.1 निम्न सहायक ष्शब्दों की सहायता से 'होली' पर अनुच्छेद लिखिए—


(रंगों का त्योहार, फाल्गुन मास पूर्णिमा, होलिका दहन, दूसरे दिन, रंग व गुलाल, भेदभाव, गले)

प्र.2 निम्न ष्शब्दों की सहायता से अनुच्छेद पूरा करो—

(पंख, फैलाकर, बादलों, राष्ट्रीय)

1. मोर हमारा ----- पक्षी है।
2. इसके----- बहुत सुंदर होते हैं।
3. ----- को देखकर मोर खुष होता है।
4. खुष होकर यह पंख ----- नाचता है।

प्र.3 चित्र देखकर चार वाक्य बनाओ—



THE GYAN BHAIRAV GLOBAL SCHOOL

HARPUR, GUTHANI, SIWAN, BIHAR 841435

(Run by Gyan Bhairav Foundation registered under society act 1860, Govt. of Bihar)

www.gbgs.ac.in, gbglobalschool@gmail.com

School Registration Code-RTE/SWN/2018-19/000231

UDISE – 10160807502

CLASS III

भाग – ग (व्याकरण)

प्र.1 सही उत्तर लिखो-

1. निम्न में स्वर हैं- (अ) च (ब) प (स) ए ()
2. व्यंजन होते हैं- (अ) 11 (ब) 13 (स) 33 ()
3. पतंग के 'त' में मात्रा है- (अ) आ (ब) अं (स) अः ()
4. औ की मात्रा होती है - (अ) ' (ब) ' (स) ()
5. निम्न में संज्ञा शब्द है - (अ) तुम (ब) गुलाब (स) वह ()
6. निम्न में क्रिया शब्द है - (अ) लाल (ब) यह (स) चलना ()
7. 'दिन' का विलोम होगा - (अ) सुबह (ब) रात (स) उजाला ()
8. मिटाई का बहुवचन होगा - (अ) मिटाईयाँ (ब) मिटाइयाँ (स) मीटाइयाँ ()

प्र.2 सही सर्वनाम चुनकर वाक्य पूरे करो-

1. क्या- ----- घर जाएँगे? (आप / उसने)
 2. ----- नाम इकबाल है। (मैं / मेरा)
- प्र.3 उचित हिंदी अंक/शब्द लिख वाक्य पूरे करो -
1. बीस से पहले ----- आता है।
 2. एक साल में ----- महीने होते हैं।

प्र.4 रेखांकित शब्दों के लिंग बदलकर वाक्य पूरे करो-

1. माली पौधे लगा रहा है और ----- फूल तोड़ रही है।
2. लुहार ----- के साथ काम पर गया।

प्र.5 कोष्ठक में दिए गए शब्द को षुद्ध कर खाली जगह में लिखो-

1. मैं ----- पीता हूँ। (दुध)
2. हथी जंगल में ----- रहा है। (घुम)
3. मुझे ----- करना पसंद है। (पढ़ाई)
4. दादी ने राहुल को ----- सुनाई। (कहानि)

प्र.6 कोष्ठक में दिए विशेषणों को सही जगह लिखो-

(भरारती कच्चा ऊँचा नटखट)

1. पर्वत बहुत ----- है।
2. आम ----- है।
3. रोहन बहुत ----- है।

4. दादी ने राहुल को ----- सुनाई। (कहानि)

प्र.6 कोष्ठक में दिए विशेषणों को सही जगह लिखो-

(भरारती कच्चा ऊँचा नटखट)

1. पर्वत बहुत ----- है।
2. आम ----- है।
3. रोहन बहुत ----- है।

4. ----- बंदर उछल-कूद कर रहा है।

प्र.7 कोष्ठक में दिए निर्देशानुसार खाली जगह भरो-4

1. ----- मैदान में खेल रहे हैं। (संज्ञा)
2. मैं बाजार -----। (क्रिया)
3. आज गरमी नहीं ----- है। (विलोम)
4. पेड़ पर ----- चहचहा रही हैं। (चिड़िया/चिड़ियाँ)

THE GYAN BHAIRAV GLOBAL SCHOOL

HARPUR, GUTHANI, SIWAN, BIHAR 841435

(Run by Gyan Bhairav Foundation registered under society act 1860, Govt. of Bihar)

www.gbgs.ac.in, gbglobalschool@gmail.com

School Registration Code-RTE/SWN/2018-19/000231

UDISE – 10160807502

CLASS III

GK

SOLVE THE FOLLOWING

1	The bollywood of india is								
A	Kolkata	B	Mumbai	C	Chennai	D	Patna	E	Delhi
2	The heart of India is.....								
A	Kolkata	B	Mumbai	C	Chennai	D	Patna	E	Delhi
3	Head of municipal corporation is								
A	Mayor	B	Chairman	C	Panches	D	Mukhiya	E	None
4	The underground railway is known as.....								
A	Eastern railway	B	Western railway	C	Metro railway	D	North east railway	E	None
5	River that flows through delhi is								
A	Ganga	B	Yamuna	C	Gandak	D	Koshi	E	All
6	Bharatnatyam is the famous dance of which state								
A	Kolkata	B	Mumbai	C	Chennai	D	Patna	E	Delhi
7	Ravindra setu is located in								
A	Kolkata	B	Mumbai	C	Chennai	D	Patna	E	Delhi
8	The largest continent of the world is								
A	Africa	B	Asia	C	Australia	D	America	E	Usa
9	The largest ocean of the world is								
A	Pacific	B	Antarctic	C	Atlantic	D	Indian	E	Arctic
10	A book of maps is called								
A	Chart	B	Globe	C	Map	D	Atlas	E	None
11	The red fort was built by								
A	Shahjahan	B	Babar	C	Humayun	D	Akbar	E	Birbal
12	The highest mountain peak of the world is								
A	Mt. Everest	B	K2	C	Tiger hill	D	Garhwal	E	None
13	A model of earth is called								
A	Chart	B	Globe	C	Map	D	Atlas	E	None
14	Cotton processing is the main industry of which town								
A	Mumbai	B	Delhi	C	Kolkata	D	Patna	E	Delhi
15	The bhabha atomic research centre is located in								
A	Mumbai	B	Delhi	C	Kolkata	D	Patna	E	Delhi
16	Gateway of india is found in								
A	Mumbai	B	Delhi	C	Kolkata	D	Patna	E	Delhi
17	Vets refers to								
A	Doctor	B	Teacher	C	Postman	D	Policeman	E	None
18	The policeman keeps an eye on								
A	Bad character	B	Traffic police	C	Gentleman	D	Women	E	Men
19	We have health centres in								
A	Cities	B	Towns	C	Villages	D	Country	E	None
20	The source of income of a panchayat is								
A	Taxes on school	B	Taxes on doctor	C	Taxes on shops	D	Taxes on roads	E	None
21	National waterways no.1 covering a distance of about..... km								
A	1260	B	1602	C	1062	D	1620	E	1026
22 Can reach the places where no other transport can reach								
A	Aeroplane	B	Rail	C	Bus	D	Ship	E	Helicopters
23	It stands for								
A	International trade	B	Information trade	C	Information technology	D		E	None

THE GYAN BHAIRAV GLOBAL SCHOOL

HARPUR, GUTHANI, SIWAN, BIHAR 841435

(Run by Gyan Bhairav Foundation registered under society act 1860, Govt. of Bihar)

www.gbgs.ac.in, gbglobalschool@gmail.com

School Registration Code-RTE/SWN/2018-19/000231

UDISE – 10160807502

CLASS III

24 Is the means of mass communication								
A	Telegraph	B	Telephone	C	E-mail	D	Television	E	None
25 Is an important link in business chain								
A	Trading	B	Manufacturing	C	Transportation	D	Both	E	None
26	The regions in the mountainous parts have a climate								
A	Colder	B	Hotter	C	Moderate	D	Both	E	None

THE GYAN BHAIRAV GLOBAL SCHOOL

HARPUR, GUTHANI, SIWAN, BIHAR 841435

(Run by Gyan Bhairav Foundation registered under society act 1860, Govt. of Bihar)

www.gbgs.ac.in, gbglobalschool@gmail.com

School Registration Code-RTE/SWN/2018-19/000231

UDISE – 10160807502

CLASS III

SCIENCE

SOLVE THE FOLLOWING

1. Big and strong plants are called shrubs/herbs/trees
2. A rose plant is a herb/tree/shrub
3. Small and weak plants are called shrubs/herbs/trees
4. The pea is a shrubs/herbs/trees/climbers
5. What are big plants called?
6. What are plants which climb on support called?
7. Where does lotus grow?
8. Name three things that a plant needs to grow?
9. We get pulses from animals/birds/plants
10. Trees give us iron/wood/steel
11. Spinach is a leaf/fruit/flower
12. Which is an oil seed potato/ground nut/chilli
13. Coconut is an oil seed/fruit/flower
14. From where do we get food?
15. Name a vegetable which we eat raw
16. Where does radish grow/
17. What is the taste of tamarind?
18. The fish is an example of pet animal/land animal/water animal
19. Animals that live in or around our homes are called water animals/land animals/pet ANIMALS
20. Most insect have two/three/six legs.
21. Name the two pet animals
22. How do the birds fly?
23. Can fish remain alive outside water?
24. How many legs do insects have?
25. Eat green grasses. Horses/tigers/frogs
26. Dogs are kept in a shed/stable/kennel
27. Who makes a hive spider/honey bee/ant
28. What does goat and cow eat?
29. What does hen eat?
30. What does a bird make to lay its eggs?
31. Where does a lion live?
32. Where do horses live?

PROJECT WORK

1. CREATE A POSTER IN WORD SHOWING "SAVE TREES" AND TAKE A PRINT OUT.
2. MAKE A DIAGRAM SHOWING FUNCTION OF COMPUTER PARTS ON A CHART PAPER.

THE GYAN BHAIRAV GLOBAL SCHOOL

HARPUR, GUTHANI, SIWAN, BIHAR 841435

(Run by Gyan Bhairav Foundation registered under society act 1860, Govt. of Bihar)

www.gbgs.ac.in, gbglobalschool@gmail.com

School Registration Code-RTE/SWN/2018-19/000231

UDISE – 10160807502

CLASS III
